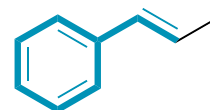
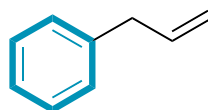
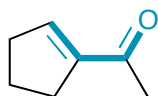
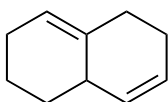


Additional Practice Problems

Which of the following compounds contain conjugated pi-systems?



Predict the products of the following Diels-Alder reactions:

