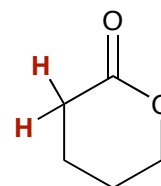
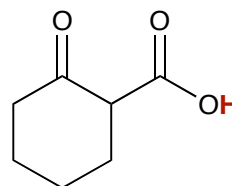
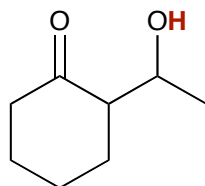
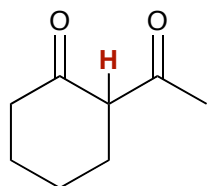


Additional Practice Problems

Identify the most acidic hydrogens in the following molecules.



Show how you would synthesize the following from the starting materials given.

