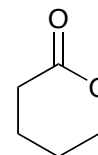
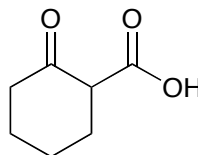
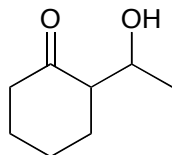
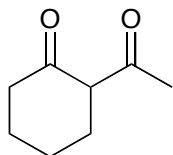


Problems from your text

22.1, 22.2, 22.4, 22.7, 22.11, 22.14, 22.15, 22.21, 22.22, 22.24, 22.26, 22.27, 22.29, 22.37, 22.38, 22.44, 22.46

Additional Practice Problems

Identify the most acidic hydrogens in the following molecules. (12 pts)



Show how you would synthesize the following from the starting materials given.

