

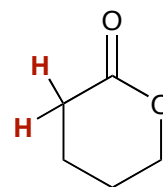
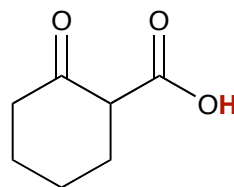
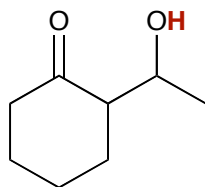
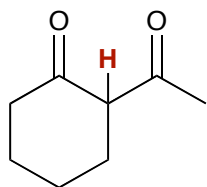


# Chem 342 • Organic Chemistry II

## Suggested Problems for Chapter 22

### Additional Practice Problems:

Identify the most acidic hydrogens in the following molecules.



Show how you would synthesize the following from the starting materials given.

